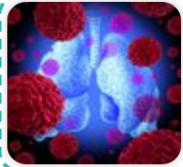


# Year 6 Animals Including Humans

## - Blood and Transportation



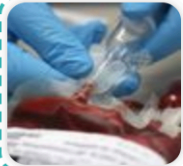
Describe the composition of blood



Describe how oxygen is moved around the body



Explain how blood is filtered



Describe what a blood transfusion involves




Describe how diabetes is managed




Describe the roles of bacteria


| Scientific Enquiry Covered  | Rocket Words Covered  | Name of Task / Tasks   | Resources Needed  | National Curriculum Reference  | Summative Quiz Questions  |
|---|---|--|---|--|---|
| Report on findings from enquiries, including oral and written explanations, displays of results | red blood cell, platelet, haemoglobin, plasma, antibody           | Research diseases which affect the composition of blood  | <i>Composition of Blood</i> Handout, Research Materials - Books/Internet<br><i>Modelling the Circulatory System</i> , Clear tubing<br>Water, Scissors, Tape, Red food colouring                         | Identify and name the main parts of the human circulatory system, and describe the functions of the heart, blood vessels and blood | About <b>Select...</b> of our blood is made from <b>Select...</b> This is a thin, pale <b>Select...</b> liquid which carries the formed elements. The formed elements describe the part of the blood which is made up of cells and cell fragments. _____ blood cells are the most abundant type of cell found in the blood.<br><i>Choose 1 answer.</i> Platelets are cell fragments that help our blood clot together in a process called _____.<br><i>Choose 1 answer</i> As soon as the white blood cells find something which shouldn't be there, they <b>attack</b> it to protect us against <b>illness and disease</b> and other <b>white</b> blood cells rush over.                           |
| Use scientific language and illustrations to communicate and justify your ideas                 | trachea, bronchi, alveoli, capillary, diaphragm                   | Make a Model Lung.   | <i>Make a Model Lung</i><br>Plastic bottles with bottoms cut off.<br>Straws.<br>Elastic bands.<br>Scissors.<br>Balloons (2 per bottle).<br>Modelling clay<br><i>Handout</i>                             | Identify and name the main parts of the human circulatory system, and describe the functions of the heart, blood vessels and blood | The respiratory and circulatory systems meet at the trachea. <i>Choose 1 answer</i> The respiratory and circulatory system meet in the <b>Select...</b> They contain tiny <b>Select...</b> and your <b>Select...</b> blood cells absorb the oxygen from the breath you took. It carries this oxygen to all the cells in your <b>Select...</b> The blood also picks up <b>Select...</b> as it travels around your body, which is no use to the body. Order the route air takes through your body. <i>Drag the answers into the correct order</i><br>When the diaphragm arches down, what happens? <i>Choose 1 answer</i><br>Which organ is responsible for your breathing?<br><i>Choose 1 answer</i> |
| Report on findings from enquiries, including oral and written explanations, displays of results | spleen, liver, filter, organ, microorganism                       | Creating a model of the liver or spleen.   | Handout<br>Modelling clay   | Identify and name the main parts of the human circulatory system, and describe the functions of the heart, blood vessels and blood | Your red blood cells die at a rate of two million per day. One of the liver's job is to remove <b>{{dead}}</b> blood cells. It breaks them down and <b>{{reuses}}</b> what it can. The liver can put up with <b>{{a lot of}}</b> damage. Another <b>{{cleansing}}</b> organ is the spleen which helps to filter your blood and remove harmful <b>{{wastes}}</b> . It is located near the <b>{{stomach}}</b> . In a transplant, when a person is given half of a new liver, the other half will grow back! Which of these organs help to cleanse your body. Red blood cells last for about how long?   |
| Identify scientific evidence that has been used to support or refute ideas or arguments         | transfusion, blood group, Karl Landsteiner, phlebotomist, patient | Produce a simple model that shows which blood groups can donate to one another and answer questions on blood | <i>Blood Transfusion Model</i><br>Handout   | Identify and name the main parts of the human circulatory system, and describe the functions of the heart, blood vessels and blood | Donated blood has to be carefully matched as not all blood will suit all patients. <b>{{Doctors}}</b> had been trying to perform transfusions before Karl Landsteiner discovered that not everyone has the same <b>{{type}}</b> of blood. He noticed that when he mixed from two people, the <b>{{cells}}</b> would often clump together and <b>{{clot}}</b> . He concluded there were four different types of blood, called blood <b>{{groups}}</b> . Who collects blood samples from patients? Which of these are blood types? (Tick all that apply) What will a patient receive if they need more blood?   |
| Report on findings from enquiries, including oral and written explanations, displays of results | pancreas, insulin, diabetes, type 1 diabetes, type 2 diabetes     | Explore how diabetes effects peoples' lives.   | <i>Plan a Menu</i><br>Reference books/computers with internet access.<br><i>Diabetes Investigation - A Day in the Life</i><br>Reference books/computers with internet access<br><i>Handout</i>          | Recognise the impact of diet, exercise, drugs and lifestyle on the way their bodies function                                       | A person with diabetes has too little sugar in their blood. Insulin is a hormone that is made in the <b>{{pancreas}}</b> and works like a key to a door. It allows the sugar to go from the <b>{{bloodstream}}</b> into the <b>{{cells}}</b> . Diabetes occurs when the sugar levels in the blood <b>{{rise}}</b> . This may be because there is not enough <b>{{insulin}}</b> or if the <b>{{insulin}}</b> can't open the door to the body cells, so no <b>{{sugar}}</b> can do through. Which of these foods contains sugar? Which type of diabetes do children usually have? What is sugar used by the body for?   |
| Report on findings from enquiries, including oral and written explanations, displays of results | prokaryotes, microscope, bacteria, nucleus, probiotics            | Psychedelic Milk.  | <i>Colour Changing Milk Experiment</i> , Milk (whole, semi-skimmed, skimmed, cream) Dinner plates<br>Food colouring in red, yellow, green, blue Washing up liquid<br>Cotton wool buds<br><i>Handout</i> | Describe the ways in which nutrients and water are transported within animals, including humans                                    | Prokaryotes have no nucleus. Bacteria are found <b>{{everywhere}}</b> and are very <b>{{useful}}</b> to life. Some bacteria cause <b>{{diseases}}</b> , which can be treated using medicine. Cyanobacteria are prokaryotes but used to be called <b>{{blue-green}}</b> algae. They are the <b>{{beginning}}</b> of the food chain for many animals that live in water. They also produce <b>{{oxygen}}</b> . Which of these are bacteria shapes? What are prokaryotes also called? Where do prokaryotes get their food from?  |



# Year 6 Evolution and Inheritance




**Explain how adaptations help animals and plants survive**




**Describe the process of natural selection**




**Explain what fossils can tell us**



**Explain why animals can look different to their parents**




**Explore the work of palaeontologist Mary Anning**



**Describe the process of genetic modification**

| Scientific Enquiry Covered  | Rocket Words Covered  | Name of Task / Tasks  | Resources Needed   | National Curriculum Reference  | Summative Quiz Questions   |
|---|---|---|--|--|--|
| Identify scientific evidence that has been used to support or refute ideas or arguments | adaptation, desert, cactus, insulating, environment                 | Create your own animal that would be well adapted to survive in the desert. | Handout  | Identify how animals and plants are adapted to suit their environment in different ways and that adaptation may lead to evolution  | Which of these creatures would you expect to find in an arid desert? Which wouldn't you expect to find there? Cacti have developed {{spines}} in order to stop {{predators}} eating them and stealing their precious supply of {{water}}. This is a key {{adaptation}} that helps them survive in an arid desert. Some cacti can grow to up to 15 metres tall. Have another look at the expert film on scorpions and toads. What advantages do scorpions have as a result of their exoskeleton (hard shell-like skin)? Choose all that apply. Which of these challenges might a creature living in an arid desert expect to come across? (choose all that apply)                                       |
| Identify scientific evidence that has been used to support or refute ideas or arguments | Charles Darwin, habitat, ancestor, Natural Selection, extinct       | Camouflaged Worms.  | <i>Camouflaged worms - Individual model</i><br>20 plain toothpicks<br>20 toothpicks painted to match the floor/carpet, Stopwatch, Cups.<br>Tweezers, Handout 1                                     | Pupils might find out about the work of palaeontologists such as Mary Anning and about how Charles Darwin and Alfred Wallace developed their ideas on evolution.   | The Darwin Medal was first awarded to Charles Darwin in 1890. On the Galapagos Islands in the Select... Ocean, he found lots of birds that looked like Select... They were all very similar, except for their Select... and had evolved from one, shared ancestor. He also noticed that the Select... were not all the same. They had Select... themselves to suit the Select... of the islands they were on. Order these events of Charles Darwin's life. <i>Drag the answers into the correct order</i> What was the ship called that Charles Darwin sailed to the Galapagos Islands on? <i>Choose 1 answer</i> A naturalist is someone who studies...? Tick all that apply. <i>Choose 2 answers</i> |
| Identify scientific evidence that has been used to support or refute ideas or arguments | fossil, fossilisation, evidence, dinosaur, petrified                | Review the handout and answer the questions.                                | Handout  | Recognise that living things have changed over time and that fossils provide information about living things that inhabited the Earth millions of years ago  | Many plants and animals end up as fossils. <i>Choose 1 answer</i> Order these in the correct order to explain how a fossil is made. <i>Drag the answers into the correct order</i> Land animals are never fossilised. <i>Choose 1 answer</i> Sediment is made up of...? Tick all that apply. <i>Choose 3 answers</i> . What is a coprolite? <i>Choose 1 answer</i>   |
| Identify scientific evidence that has been used to support or refute ideas or arguments | generation, species, evolution, offspring, DNA                      | Extract the DNA from a banana.  | <i>Extracting DNA from a Banana!</i><br>Goggles, Apron / Lab Coat, Banana, Sealable sandwich bag, Warm Water, Salt, Washing Up Liquid<br>Filter Paper, Funnel, Rubbing Alcohol, Plastic containers | Recognise that living things produce offspring of the same kind, but normally offspring vary and are not identical to their parents<br>They should also appreciate that variation in offspring over time can make animals more or less able to survive in particular environments, for example, by exploring how giraffes' necks got longer<br>Identify how animals and plants are adapted to suit their environment in different ways and that adaptation may lead to evolution | Every living organism in the wild has to compete to live. <i>Choose 1 answer</i> . Which of these animals are extinct? <i>Drag the images into the correct area</i><br>Every offspring is Select... but it may share Select... from one or both of its parents. The parents and the young are from Select... generations. Animals with characteristics that are better adapted to survive in a habitat will survive but others, which aren't, will eventually die out or become Select...<br>. What are an animal's offspring?<br><i>Choose 1 answer</i><br>Which characteristics do the cat species share?<br><i>Choose 2 answers</i>   |
| Identify scientific evidence that has been used to support or refute ideas or arguments | Mary Anning, specimen, prehistoric, Jurassic Coast, palaeontologist | Create a fossil using simple materials!                                     | <i>Make Your Own Fossil</i><br>Plasticine<br>Plaster of Paris<br>Water<br>Mixing Dish/Bowl<br>Cocktail sticks<br>Handout - Page 1  | Pupils might find out about the work of palaeontologists such as Mary Anning and about how Charles Darwin and Alfred Wallace developed their ideas on evolution.   | The Jurassic Coast is a World Heritage Site. <i>Choose 1 answer</i> Mary Anning lived in Lyme Regis, Dorset, which had once been Select... It is called the Jurassic Coast because so many Select... ossils have been found there. She often went fossil hunting after Select... and would sell her findings to make money for her family. Mary Anning was a famous... Find 3 answers. <i>Choose 3 answers</i> . Mary Anning was the first person to discover which fossilised full skeleton? <i>Choose 1 answer</i> . What did Mary Anning use belemnites to create? <i>Choose 1 answer</i>   |
| Identifying scientific evidence that can be used to support or refute your arguments    | genetically modified crops, toxin, resilience, breeding, yield      | Hold a debate on GM crops.  | Handout  | Identify how animals and plants are adapted to suit their environment in different ways and that adaptation may lead to evolution  | No GM crops are grown commercially in the UK. <i>Choose 1 answer</i> . A GM crop is one that scientists have Select... - it has not Select... naturally. Scientists want to improve crops by changing their Select... to give them new characteristics. For example, they may take a gene that allows a crop to hold more water and put it into a plant that grows in a Select... climate. Which of these GM products are allowed to be imported to the UK? <i>Drag the images into the correct area</i><br>GM crops may cause harm to...?<br><i>Choose 3 answers</i><br>What does GM stand for?<br><i>Choose 1 answer</i>   |



# Year 6 Animals Including Humans

## - The Heart and Health



Describe the function of blood



Describe the function of blood vessels



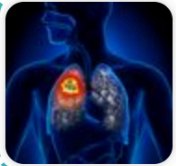
Describe how your heart moves blood around the body



Describe what affects your heart rate

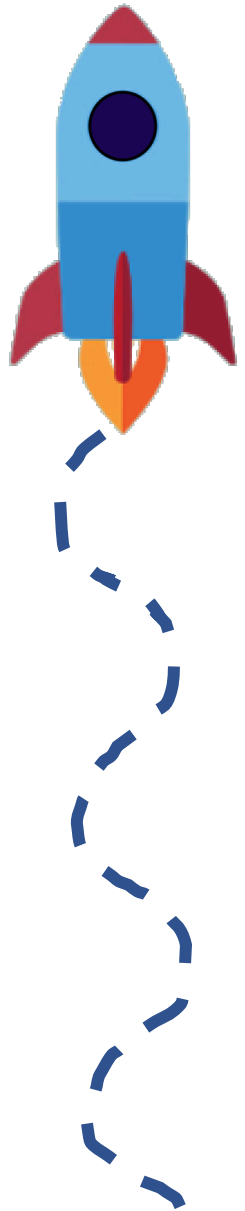


Explore the different food groups and identify ways to eat a balanced diet




Describe the consequences of an unhealthy lifestyle

| Scientific Enquiry Covered   | Rocket Words Covered  | Name of Task / Tasks  | Resources Needed   | National Curriculum Reference   | Summative Quiz Questions  |
|--|---|---|--|---|---|
| Identify scientific evidence that has been used to support or refute ideas or arguments          | transportation, cell, nutrients, protein, circulatory system            | Model cell movement using gummy bears!  | <i>Gummy Sweet Osmosis</i><br>Gummy sweets<br>Beakers/ cups/ glasses<br>Milk<br>Tap water<br>Salt Water<br>Cola/soda<br>Rulers<br>Handout          | Identify and name the main parts of the human circulatory system, and describe the functions of the heart, blood vessels and blood<br>Describe the ways in which nutrients and water are transported within animals, including humans | Capillaries transport nutrients, oxygen and waste products. Nutrients travel through the capillaries, which are tiny blood Select...<br>, until they reach a cell that needs them. Select...<br>has many important functions and makes up Select...<br>of our bodies. It enters the red blood cells by a process called Select...<br>. Which of these make up the circulatory system? (Tick all that apply) What does protein help your muscles do? What do enzymes extract from carbohydrates?   |
| Record data and results of increasing complexity using scientific diagrams                       | blood vessels, heart attack, artery, fatty deposits, vein               | Investigate blood clotting!   | Four equally sized disposable cups<br>Pin<br>Ruler<br>Stopwatch  | Identify and name the main parts of the human circulatory system, and describe the functions of the heart, blood vessels and blood  | People have always known that the heart pumps blood in a circuit through the body. Exercising makes your heart muscle Select...<br>and can help you live longer. Eating Select...<br>is another key to a healthy heart. When you eat Select...<br>fat than your body can use, it may build up as fatty deposits inside your blood vessels. These deposits can cause blood Select...<br>. All fats that you eat are bad for you. Doctors were watching blood flow in the tail of which live animal, when they realised Harvey was right? What invention was used to investigate William Harvey's claim that the heart was at the centre of a blood circulating system?   |
| Plan different types of scientific enquiries to answer questions                                 | involuntary, contract, relax, oxygenated, bloodstream                   | Create a model of the heart.  | <i>Modelling the Heart</i><br>Plastic bottles with wide neck<br>Water<br>Balloons<br>Skewer or pencils<br>Straws<br>Sticky tape<br>Handout         | Identify and name the main parts of the human circulatory system, and describe the functions of the heart, blood vessels and blood  | The aorta is the biggest vessel of all. Your heart is a powerful Select...<br>. Every time it Select...<br>, it pumps blood to all parts of your Select...<br>. When you exercise, your heart beats Select...<br>because it is having to work harder. Order the journey of blood.<br><i>Drag the answers into the correct order.</i> The heart is divided into how many chambers?<br><i>Choose 1 answer</i><br>Which of these are part of your circulatory system? Tick all that apply.<br><i>Choose 2 answers</i>  |
| Record data and results of increasing complexity use scientific diagrams and bar graphs          | blood pressure, general practitioner, pulse, heart rate, exercise       | Check your heart rate when resting and after exercise. Draw a bar graph to show your results! | <i>Beating Pulses</i><br>Stopwatch<br>Pen<br>Handout 1 - Beating Pulses  | Identify and name the main parts of the human circulatory system, and describe the functions of the heart, blood vessels and blood  | Everyone's heart rate is 90 pulses per minute. <i>Choose 1 answer</i> Your Select...<br>is how often your heart squeezes to pump blood around the body. Your Select...<br>is the pushing force caused by heart pumping the blood through the body. When you exercise heart rate Select... because your cells are using lots more Select...<br>. Having high blood pressure (hypertension) can result in which of these medical conditions? <i>Choose 2 answers</i> Blood pressure is of one of the things that nurses and GPs check to make sure which system is working properly? <i>Choose 1 answer</i><br>_____ walls are very thin so oxygen and nutrients can easily pass through.<br><i>Choose 1 answer</i> |
| Take measurements, using a range of scientific equipment, with increasing accuracy and precision | nutrients, carbohydrates, balanced diet, vitamins and minerals, protein | Investigate what type of taster you are.  | Student Handouts<br>Natural, blue food dye<br>Cotton buds<br>Card<br>Hole-punch<br>Paper towels<br>Mini cups<br>Drinking water<br>Magnifying glass | Recognise the impact of diet, exercise, drugs and lifestyle on the way their bodies function<br>Describe the ways in which nutrients and water are transported within animals, including humans                                       | It is important to eat an equal amount of each of the food groups. Order the food groups from the smallest to the largest amount needed for a balanced diet.<br><i>Drag the answers into the correct order.</i> Select...provides our body with energy. Fruit and vegetables contain Select... and minerals which are essential for our body to function well. Protein is needed for Select...and you must also make sure you drink enough Select... What does meat provide us with? <i>Choose 1 answer</i><br>Which of the following are carbohydrates? <i>Choose 2 answers</i>  |
| Identify scientific evidence that has been used to support or refute ideas or arguments          | addiction, black tar, cigarette, lung cancer, poison                    | Create an anti-smoking campaign!  | <i>Anti-Smoking Campaign</i><br>Handouts<br>Paper / pens / craft materials   | Recognise the impact of diet, exercise, drugs and lifestyle on the way their bodies function  | Smoking cigarettes is one of the worst things you can do to your lungs and heart.<br><i>Choose 1 answer</i> Cigarette smoke also contains sticky, black Select...<br>, which builds up on the smoker's lungs. The Select...<br>can become so stiff that they cannot expand and pass Select...<br>to the blood. When smokers exercise, they run out of Select...<br>and their heart pumps harder. Select...<br>oxygen actually reaches their cells through. Cigarette smoke only affects the smoker's lungs. Roughly how many different chemicals enter the lungs when a person inhales cigarette smoke? Cigarettes smoking contain which of the following? (Tick all that apply)                                  |





# Year 6 Light




**Explain how light travels in a straight line and shadows are formed**



**Compare materials of different transparencies**



**Describe how lenses can be used**



**Explain how water can bend light**




**Show white light is a mixture**



**Investigate light colour mixing**

| Scientific Enquiry Covered                                 | Rocket Words Covered   | Name of Task / Tasks   | Resources Needed   | National Curriculum Reference  | Summative Quiz Questions  |
|--|--|--|--|--|---|
| Taking measurements, recording data and identifying trends | shadow, opposite, obstruct, light ray, fluorescent               | Investigate how distance from a light source affects the size of a shadow.                         | Casting Shadows<br>Acetate with 1x1cm square<br>1m Ruler & 30cm ruler<br>Light Source (i.e. a torch)<br>Clamp Stand - Optional   | Recognise that light appears to travel in straight lines<br>Use the idea that light travels in straight lines to explain that objects are seen because they give out or reflect light into the eye<br>Use the idea that light travels in straight lines to explain why shadows have the same shape as the objects that cast them | Light is a form of energy. Fill out the blanks<br>Light travels in {{straight lines}}. A {{photon}} is the basic unit that light is made from. They travel together in {{narrow}} beams called {{rays}}. Light continues to travel until it is {{blocked}} by an object. Which of these are sources of light? Fluorescent lights are often bright. The path of the light is blocked by what?  |
| Apply knowledge and understanding about light              | luminous, non-luminous, light source, transparent, opaque        | Design and build your own lamp.  | scissors<br>tape/ masking tape<br>coloured filters/ coloured sweet papers<br>acetate/ cling film<br>paper (coloured optional)<br>card (coloured optional)<br>tracing paper<br>torch/ circuit building kit                    | Explain that we see things because light travels from light sources to our eyes or from light sources to objects and then to our eyes  | Which of these are natural light sources and which are artificial light sources? Light can only travel in straight lines.<br>Light enters your eye through the {{cornea}}, which is the eye's first layer. It next goes through the {{pupil}}. This is the dark opening in the {{centre}} of your eye. It is in the middle of the coloured part, which is called the {{iris}}. Which of these reflect light? (Tick 3 boxes) Fill in the blank - If something is _____, light can not travel through it.   |
| Apply knowledge and understanding about lenses             | focal point, lens, refraction, refracting telescope, convex lens | Build a refracting telescope.  | Build a Refracting Telescope<br>2 x magnifying lenses<br>metre stick/ piece of wood<br>modelling clay/ sticky tack<br>ruler<br>set square<br><i>Handout</i>  | Explain that we see things because light travels from light sources to our eyes or from light sources to objects and then to our eyes<br>Use the idea that light travels in straight lines to explain that objects are seen because they give out or reflect light into the eye  | Light moves faster through water than through air. On an extremely {{hot}} day, you can see heat haze. This is when some {{air}} get hotter than the rest and changes the {{speed}} of light. Light {{rays}} get bent as they pass through the heat and things beyond the haze look {{distorted}}. Which of these can you see light through? (Tick 2 boxes)<br>When light rays pass from one transparent medium to another, they appear to change direction. What is this called? When an object is placed in water, how will it appear?  |
| Making and recording observations                          | medium, magnify, rainbow, apparent, distorted                    | Observe how a glass of water can be used as a lens.  | Glass of water lens<br>cylindrical glass of water<br>drawing of an arrow<br>Droplet Magnifier<br>small piece of waterproof transparent material i.e. cling film, acetate, clear acrylic, petri dish etc.<br>pipette<br>water | Explain that we see things because light travels from light sources to our eyes or from light sources to objects and then to our eyes  | Water acts as a lens but things look distorted when you look at them through water. Lenses can only make things look bigger. A lens is a {{curved}} piece of {{transparent}} material. The curve makes the light rays change {{course}}. When you hold a magnifying glass to a book, the light rays coming from the {{book}} have travelled through the {{lens}} and appear {{larger}} to your eyes. Lenses in which of these helps us to see tiny things close up - things we can't even see with our naked eye? Lenses in which of these helps us to see things very far away, in Outer Space?          |
| Predict the effects of colour mixing                       | spectrum, indigo, glass prism, mist, white light                 | Build a Newton's Colour Wheel. Write a statement which explains why the colours seem to disappear. | <i>Handout</i><br>a simple series circuit with two 1.5V batteries, wires and a motor card<br>scissors<br>glue<br>colouring pens/pencils (optional)   | Explain that we see things because light travels from light sources to our eyes or from light sources to objects and then to our eyes  | Light that comes from the Sun is white light. This is made up of all the colours in the rainbow. Order the colours of the spectrum - start with the colour that bends the least and finish with the colour that bends the most. When light passes through a prism, it is {{refracted}}. The rays of each colour bend {{differently}} so we can see all the colours that make up the {{white}} light. {{Red}} bends the least and {{violet}} bends the most. Which of these objects will refract light? What happens to the speed of light when it passes through a glass prism?                           |
| Making and recording observations                          | primary colours, secondary colour, light filter, magenta, cyan   | Investigating coloured objects under coloured lights.  | Colour Mixing<br>Green, blue, red filters<br>Torches<br>Red, blue, yellow, green, and white paper<br><i>Handout</i>  | Exploring the way that light behaves, including light sources, reflection and shadows. They should talk about what happens and make predictions.   | When mixing paint colours, the {{more}} paint you add, the darker the combined colour gets. This is because more {{light}} is being absorbed. Orange, purple and green are {{secondary}} colours and the shade will depend on the ratio of colours used. The thicker the mixture of paint, the more {{opaque}} the paint becomes. Red, blue and yellow lights are used in electronic lights. What are the primary colours of light? Which of these colours are used in a colour printer? (Tick all that apply) If red and green light are shined at the same spot of a piece of paper, what colour shows? |



# Year 6 Electricity



Explain how objects become charged



Describe the parts of an electric circuit



Explain what effects the output of a circuit



Explain how variable resistors can work like a switch




Compare electrical conductors & insulators



Build a set of traffic lights

| Scientific Enquiry Covered  | Rocket Words Covered  | Name of Task / Tasks  | Resources Needed   | National Curriculum Reference  | Summative Quiz Questions   |
|---|---|---|--|--|--|
| Carrying out simple comparative fair tests  | static electricity, charge, electric shock, friction, discharge | Explore ways of generating static electricity.  | <i>Comparing Static Generators</i><br>Fabric cloth<br>Balloon<br>Plastic ruler<br>Wooden ruler<br>PVC pipe<br>Aluminium cloth<br>Shredded tissue paper<br><i>Handout</i>   | Building on their work in year 4, pupils should construct simple series circuits, to help them to answer questions about what happens when they try different components, for example, switches, bulbs, buzzers and motors.                  | Organise these as to whether they are static electricity or powered electricity. Electrons are particles that orbit the nucleus of an atom. Friction creates a build up of electrical charge which is called static electricity. It is a flow of negatively charged electrons. What electrical charge do electrons have? What is static electricity caused by?   |
| Identify scientific evidence that has been used to support or refute ideas or arguments   | circuit, battery, component, series circuit, switch             | Building a circuit.   | <i>Circuit building</i><br>2x 3V bulbs<br>2x 1.5V cells<br>5 connecting wires<br>Switch (optional)<br><i>Handouts</i>  | Use recognised symbols when representing a simple circuit in a diagram<br>Compare and give reasons for variations in how components function, including the brightness of bulbs, the loudness of buzzers and the on/off position of switches | Batteries have a positive and neutral pole. When the switch is turned on, electrons can travel through a wire because the circuit is closed. They travel from the negative pole, around the circuit and back to the positive pole. In a bulb, the filament is a very fine wire, which resists the fast flow of electrons. This resistance turns the electricity into light! The brightness of a lamp increases as the voltage of cells used in the circuit increases. What is the very thin wire in a light bulb called? When electricity flows through a filament bulb, what is created? (Tick the correct answer.) |
| Reporting findings from your enquiry, including conclusions, in oral and written forms  | voltage, output, bulb, power, wind-up torch                     | Write a report which explains the importance of generating a light source in different situations, using the following headings:<br>Emergency Power,<br>Convenient Power and Outdoor Power.   | <i>Generating Power</i><br>Lined paper<br>A2 paper<br>Marker pens<br><i>Handout</i>  | Associate the brightness of a lamp or the volume of a buzzer with the number and voltage of cells used in the circuit  | The amount of light the bulb emits will not change as long as nothing else in the circuit changes. A torch works by using the energy that the winder puts into the torch when they turn the handle, and use that energy to light the bulb. It takes about 30 seconds to wind up a torch so it will give five minutes of steady, bright light. Whilst you are winding you will see the light getting gradually brighter, until it reaches its full level of brightness. Sort the torches into the right bucket. Wind up torches are handy because....   |
| Take measurements, use a range of scientific equipment, with increasing accuracy and precision and take repeat readings           | dimmer switch, LED, adjust, variable resistor, resistor         | Investigate how increasing the number of components in a circuit will change the voltage which flows through it. Construct a circuit with a single 1.5v cell, switch and buzzer, and then increase the number of buzzers and record what happens. | <i>Resistance is Futile</i><br>1.5V cell x 3 per group of 3 pupils<br>LEDs<br>Bulbs<br>Buzzers<br>Breadboard<br>Wire<br>Wire strippers<br>Variable resistor  | Associate the brightness of a lamp or the volume of a buzzer with the number and voltage of cells used in the circuit  | If you remove a resistor from a circuit with a light, the circuit is incomplete so the light will turn off. Image bucket<br>A resistor is an electrical component, which resists the flow of the current. In a circuit, it controls the amount of current going through the wire. Some can control only a fix amount of current but other can act like a dial switch. These are called variable resistors. What is the function of a resistor? On a resistor, what indicates the resistor's value?   |
| Plan different types of scientific enquiries to answer questions, recognise control variables where necessary                     | insulator, conductor, copper, short circuit, fuse               | Exploring electrical conductors and insulators.   | <i>Dough Circuits</i><br>Conductive and Insulating dough (instructions in Handout)<br>LED lights<br>Battery packs<br><i>Handout</i>  | Compare and give reasons for variations in how components function, including the brightness of bulbs, the loudness of buzzers and the on/off position of switches   | Cables are made of both conducting and insulating material. The wire inside the cable must be made from a conductor but the outside must be made from an insulator. This stop you from getting an electric shock. A fuse is a tiny ceramic tube surrounding a thin metal strip. A short circuit is a connection on an electric circuit that allows a current to follow an unplanned path. Which of these conduct electricity and which are insulators? How does electricity flow through insulators? Which of these are important electrical safety measures? (Tick 3 boxes)   |
| Plan different types of scientific enquiries to answer questions, including recognising and controlling variables where necessary | signal, timer-based, synchronised, receiver, sensor             | Apply your knowledge about electricity. Design and make your own traffic lights circuit.  | stiff card<br>connecting wires<br>crocodile clips<br>1.5V LEDs - caution as higher voltages may break the LEDs, test you LEDs before giving them to children.<br>2x 1.5V batteries<br>paperclips<br>drawing pins<br>split pins<br>Teacher guidance sheet<br><i>Handout</i> | Pupils might work scientifically by: systematically identifying the effect of changing one component at a time in a circuit; designing and making a set of traffic lights, a burglar alarm or some other useful circuit.                     | Emergency vehicles are able to change some traffic lights in order to save time. What is the sequence a traffic light shows? (Start with when the driver is stopped). All traffic lights have the same amount of time between signal changes. Some traffic lights work based on detectors - where are these located? (Tick 2 answers) Which colours of the traffic light are lit up to tell the driver to get ready to move?   |



# Year 6 Living Things and their Habitats



Classify living things




Explore the kingdoms of life



Describe the work of Carl Linnaeus



Describe different types of fungi



Identify different classes of vertebrates



Explore soil habitats

| Scientific Enquiry Covered  | Rocket Words Covered                                      | Name of Task / Tasks  | Resources Needed   | National Curriculum Reference   | Summative Quiz Questions  |
|---|---|---|--|---|---|
| Create your own classification key  | classify, spore, micro-organism, seed, similarities       | Create your own classification key and challenge your friends!  | <i>Create a Classification Key</i><br>Paper<br>Pens<br>Pencils<br>Books/Internet for research  | Give reasons for classifying plants and animals based on specific characteristics   | All animals are given a genus and species name. <i>Drag the images into the correct area.</i> In which country was Carl Linnaeus born? Which language is used when allocating a scientific name to an animal? In which year was Carl Linnaeus born?   |
| Use test results to make predictions to set up further comparative and fair tests               | multicellular, unicellular, kingdom, cell, MRS GREN       | Have a go at growing your own fungi!  | <i>Mould Growing Investigation</i><br>Slices of bread<br>Sealable sandwich bags<br>Water<br>Sticky labels<br>Marker pens<br>Handout    | Describe how living things are classified into broad groups according to common observable characteristics and based on similarities and differences, including micro-organisms, plants and animals                   | Under a microscope, scientists discovered new organisms that needed a new classification as they were neither plants nor animals. Scientists have classified living things into Select...groups called Select...based on different Select...One of these features is how an organism gets its Select... Select... make their own Select... but Select... do not. Select...can usually move themselves around, whilst Select... cannot. Sort these by whether they are a kingdom or not. What were the first two kingdoms scientists agreed on? Which food source is incredibly important in the ocean?  |
| Report on findings from enquiries, including oral and written explanations, displays of results | Latin, genus, Carl Linnaeus, class, species               | Research the different kingdoms of life   | <i>Classification Challenge</i><br>Handout<br>Pens<br>Paper<br>Scissors<br>Books / Internet (research)                                 | Pupils might find out about the significance of the work of scientists such as Carl Linnaeus, a pioneer of classification.  | Linnaeus's system for classification is rarely used today. Linnaeus gave Select... names to the species he identified. The Select...name was more general. Homo sapiens is the Select... word for human beings; Select... means human beings and Select... means wise. What do botanists study? Which of these species belong to the Felis genus? (Tick all that apply) Carl Linnaeus published a book called Systema Naturae. What does this mean?   |
| Record scientific data using diagrams   | mycelium, fungi, mushrooms, yeasts, hyphae                | Observe how spore prints change appearance on paper depending on their distance from it.                    | <i>Handout</i><br>Large mushrooms<br>Clamp stands<br>Clamps<br>String<br>Skewer to make hole<br>Plain paper<br>Hairspray<br>Ruler      | Describe how living things are classified into broad groups according to common observable characteristics and based on similarities and differences, including micro-organisms, plants and animals                   | What is the fungal cell wall made from? What is the scientific term for a 'mushroom'? From the top to the bottom, arrange the parts of the fungus in order. From the top to the bottom, arrange the parts of the fungus in order. Which of the following are types of fungi? Fungi are not plants. They belong to their own Select... of organisms. Fungi obtain nutrients by breaking down dead and decaying matter, whereas plants obtain nutrients via Select...<br>. Fungal cells are called Select...<br>, and a group of these come together to form the Select...<br>. Fungi can reproduce asexually by producing Select...<br>, or sexually by merging cells from two fungi together. |
| Report on findings from enquiries, including oral and written explanations, displays of results | vertebrate, cold-blooded, amphibian, reptile, mammal      | Create a hanging mobile display that gives key information about the five different classes of vertebrates. | <i>Classifying Animals</i><br>Reference books/internet<br>Scissors<br>Glue<br>Handout  | Through direct observations where possible, they should classify animals into commonly found invertebrates (such as insects, spiders, snails, worms) and vertebrates (fish, amphibians, reptiles, birds and mammals). | Animals are classified as birds if they can fly and build nests.<br><br>Which of these animals are warm-blooded and which are cold-blooded? Which of these are vertebrates? (Tick all that apply)<br><br>Why are whales classified as mammals and not fish? (Tick all that apply) What does the word amphibian mean?  |
| Research and present your findings  | carbon dioxide, microorganism, plant, oxygen, microscopic | Research different organisms which live in soil.  | <i>Handout</i><br>Books / internet<br>Poster paper<br>Pens, pencils, crayons etc.<br><i>Handout - Mission to Write! The Best Soil!</i> | Describe how living things are classified into broad groups according to common observable characteristics and based on similarities and differences, including micro-organisms, plants and animals                   | Life above the ground relies on life below ground. Soil is a Select... for many living organisms. The weather affects which type of plants and animal live in a particular soil, because of differences in Select... and how much Select... here is. Billions of Select... live in the soil and they are very important to the health of the planet. What does soil provide for a seed when it is growing? What fraction of all living things use soil as their habitat? Which of these organisms are found in soil? Tick all that apply  |

